
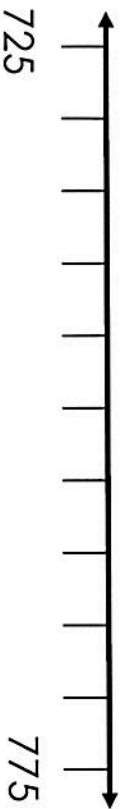




PROBLEM SOLVING 1



I have drawn a number line and calculated the midpoint.



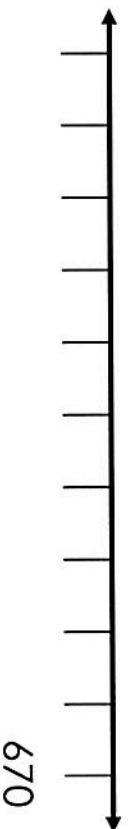
Darcey's friend has also drawn a number line.
It has the same number at the midpoint.




Could Darcey's friend have a different start and end point on her number line?
How many different solutions can you find?

PROBLEM SOLVING 2

Jane draws a number line, adding an end point.



She has not put any other numbers on the line.
What could the intervals be?



Can you find three different solutions?

