







Year 4 Securing Maths Skills Sheet 1



Task	Monday	Tuesday	Wednesday	Thursday	Friday
Write the number represented.					
Complete the calculations.	$100 + 500 =$	$800 + 100 =$	$700 - 200 =$	$300 + 400 =$	$900 - 800 =$
Complete the calculations.	$3 \times 3 =$	$6 \times 3 =$	$11 \times 3 =$	$7 \times 3 =$	$9 \times 3 =$

<p>Count in tenths to complete the sequence.</p>	$\frac{2}{10}$ $\frac{3}{10}$ $\frac{4}{10}$ $\frac{\quad}{10}$ $\frac{\quad}{10}$	$\frac{9}{10}$ $\frac{8}{10}$ $\frac{7}{10}$ $\frac{\quad}{10}$ $\frac{\quad}{10}$	$\frac{4}{10}$ $\frac{\quad}{10}$ $\frac{6}{10}$ $\frac{\quad}{10}$ $\frac{\quad}{10}$	$\frac{7}{10}$ $\frac{\quad}{10}$ $\frac{5}{10}$ $\frac{\quad}{10}$ $\frac{\quad}{10}$	$\frac{\quad}{10}$ $\frac{4}{10}$ $\frac{\quad}{10}$ $\frac{\quad}{10}$ $\frac{1}{10}$
<p>Complete the calculations.</p>	 +  =	 + 57p =	 - £1.25 =	£2.49 +  =	 - £5.95 =
<p>Count the right angles in the shape.</p>	