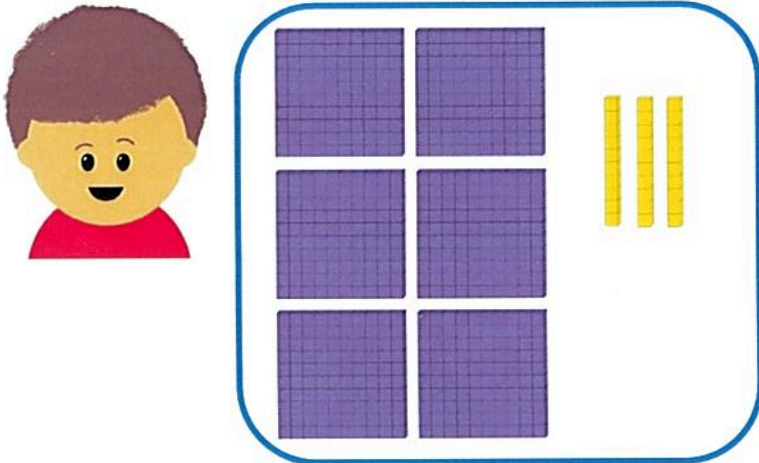


REASONING 1

Marlon was asked to make the number 603 using Base 10...



Find, describe and correct the error Marlon's made.

REASONING 2

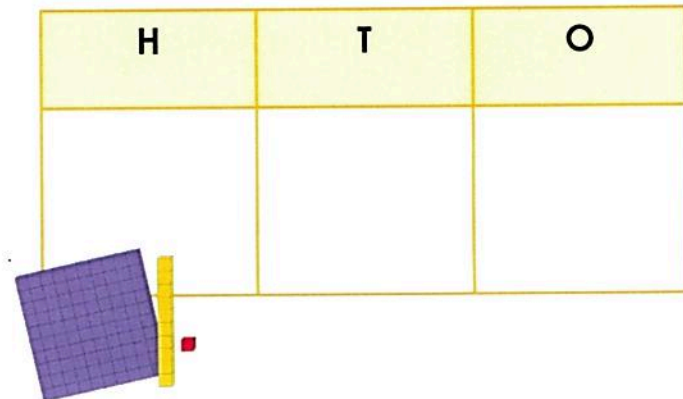
True or False?

When making a 3 digit number, the maximum number in each column is ten.

REASONING 3

Convince me!

Using Base 10, it is possible to create a number with zero in each column.



REASONING 4

What is the same about these numbers?
What is different?

842

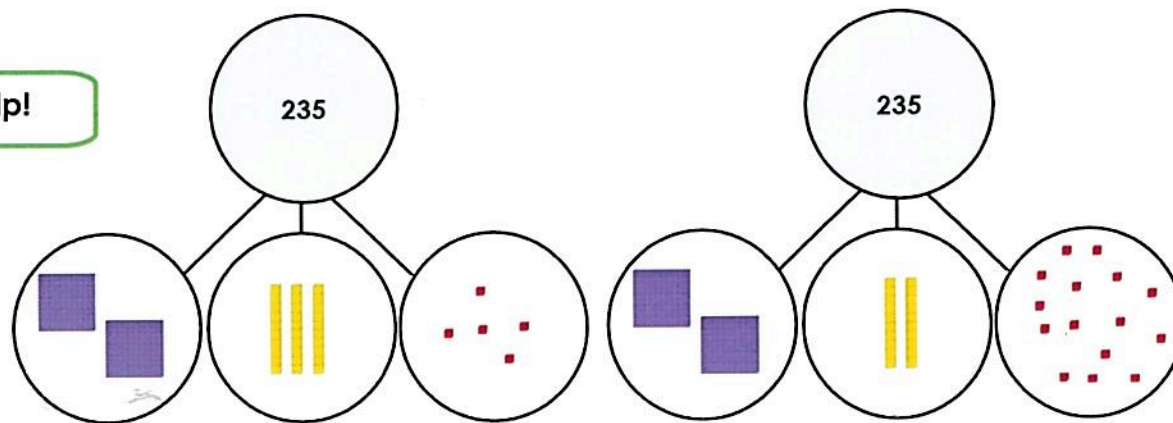
428

Draw Base 10 to help explain your thinking.



PROBLEM SOLVING 1

Help Jerry to explore different ways of making the number 235...



Task 1

Draw a part whole model with no hundreds Base 10.

Task 2

Draw a part whole model with only one tens Base 10.

Task 3

Draw a part whole model that you have not yet created!

