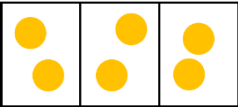
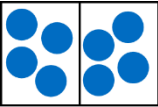
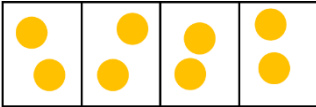
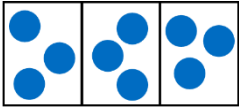
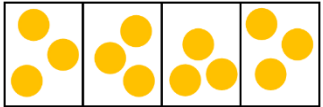


Year 3 Securing Maths Skills Sheet 3



Task	Monday	Tuesday	Wednesday	Thursday	Friday
Complete the statements using $<$, $>$ or $=$.	33 ○ 37	74 ○ sixty-one	two tens ○ 20	$50 + 6$ ○ fifty-five	$20 + 5$ ○ $10 + 15$
Complete the calculations.	$40 + 7 =$	$33 + 2 =$	$16 + 5 =$	$25 + 8 =$	$46 + 6 =$
Use the models to complete the calculations.	 $6 \div 3 =$	 $8 \div 2 =$	 $8 \div 4 =$	 $9 \div 3 =$	 $12 \div 4 =$

<p>Complete the calculations.</p>	$\frac{1}{3}$ of 6 =	$\frac{1}{3}$ of 9 =	$\frac{1}{3}$ of 30 =	$\frac{1}{3}$ of 15 =	$\frac{1}{3}$ of 18 =
<p>Compare the lengths using <, > or =.</p>	25cm ○ 52cm	6m ○ six metres	4m ○ 14m	18m ○ 18cm	99cm ○ 1m
<p>Describe the turn.</p>	