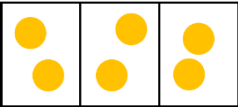
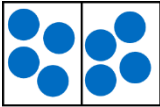
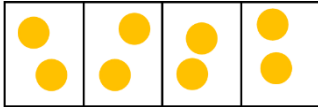
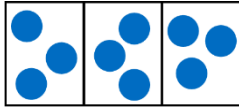
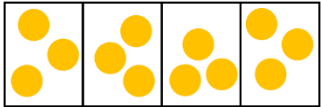


Year 3 Securing Maths Skills Sheet 3 **Answers**



Task	Monday	Tuesday	Wednesday	Thursday	Friday
Complete the statements using $<$, $>$ or $=$.	$<$	$>$	$=$	$>$	$=$
Complete the calculations.	$40 + 7 =$ 47	$33 + 2 =$ 35	$16 + 5 =$ 21	$25 + 8 =$ 33	$46 + 6 =$ 52
Use the models to complete the calculations.	 $6 \div 3 = 2$	 $8 \div 2 = 4$	 $8 \div 4 = 2$	 $9 \div 3 = 3$	 $12 \div 4 = 3$

<p>Complete the calculations.</p>	$\frac{1}{3}$ of 6 = 2	$\frac{1}{3}$ of 9 = 3	$\frac{1}{3}$ of 30 = 10	$\frac{1}{3}$ of 15 = 5	$\frac{1}{3}$ of 18 = 6
<p>Compare the lengths using <, > or =.</p>	<	=	<	>	<
<p>Describe the turn.</p>	quarter turn clockwise	half turn anticlockwise	quarter turn anticlockwise	full turn clockwise	three-quarter turn clockwise

