

WEEK 2


MENTAL STRATEGIES -
do these in your head


TIMESTABLES -
do these in your head

KEY SKILLS - you may use written calculations
for these questions

Q	Question	Answer
1	$\square + 6 = 10$	
2	What is double 5?	
3	Halve 63	
4	$26 + 30$	
5	$98 + 99$	
6	$22 + 10 = 22 + 8 + \square$	
7	$3 + 223$	
8	$20 + 61 = 20 + 60 + \square$	
9	$\square + 3 = 5$	
10	$\square + 2 = 20$	
Total out of 10		

Q	Question	Answer
1	$9 \times 5 = \square$	
2	$10 \div 2 = \square$	
3	$8 \times \square = 8$	
4	$16 \div \square = 4$	
5	$8 \times 4 = \square$	
6	$15 \div 3 = \square$	
7	$\square \times 2 = 12$	
8	$\square \div 7 = 1$	
9	$5 \times 8 = \square$	
10	$14 \div 2 = \square$	
Total out of 10		

Q	Question	Answer
1	$3905 \div 5$	
2	$7 + 25 \div 5$	
3	$2.013 \div 0.1$	
4	2.26×1000	
5	$34 - 0.74$	
6	Write $56/72$ in its simplest form	
7	Difference between 4 and -4	
8	<div style="border: 1px solid black; padding: 5px; width: fit-content;"> Value of the dot?  </div>	
9	What is the lowest common multiple of 4 and 5?	
10	What is the cube root of 27?	
Total out of 10		



What's your **NINJA** Score?
Fill in your scores in the boxes
and calculate it now!

MY **NINJA** BELT:

MENTAL STRATEGIES:

TIMESTABLES:

KEY SKILLS: +


NINJA SCORE:

NUMERACY

NINJAS

5 MINUTE SKILL CHECK

Use this space for your
KEY SKILLS workings!



WEEK 3

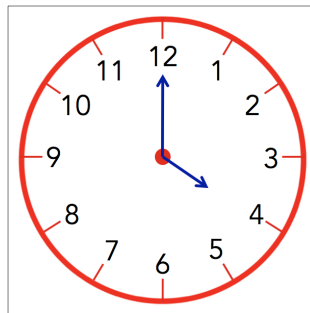
MENTAL STRATEGIES -
do these in your head

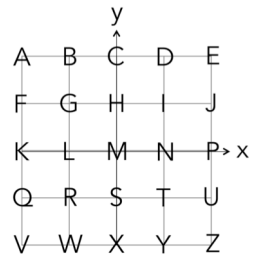
TIMESTABLES -
do these in your head


KEY SKILLS - you may use written calculations
for these questions

Q	Question	Answer
1	$\square + 13 = 20$	
2	Double 96	
3	$79 + 10$	
4	$120 - 80$	
5	$8 = 7 + \square$	
6	$13 - 10 = 13 - 3 - \square$	
7	$85 + 85 = 85 \times \square$	
8	What is the time on the clock?	am
9	$8 + 2$	
10	$81 + \square = 100$	
Total out of 10		

Q	Question	Answer
1	$6 \times 6 = \square$	
2	$3 \div 3 = \square$	
3	$4 \times \square = 32$	
4	$4 \div \square = 4$	
5	$5 \times 4 = \square$	
6	$45 \div 9 = \square$	
7	$\square \times 7 = 28$	
8	$\square \div 6 = 9$	
9	$4 \times 5 = \square$	
10	$48 \div 8 = \square$	
Total out of 10		



Q	Question	Answer
1	$2757 + 5432$	
2	$4^2 + 2 \times 4$	
3	Write Four Thousand, Three Hundred and Twenty in digits	
4	$5.94 \div 10$	
5	$1 \times (-8)$	
6	Round 0.7475 to 1 d.p.	
7	$1 + (-9)$	
8	Round 0.4559 to 2 s.f.	
9	Letter at (-2, -2) 	
10	$10/1 = \square/4$	
Total out of 10		



What's your **NINJA** Score?
Fill in your scores in the boxes
and calculate it now!

MENTAL STRATEGIES:

TIMESTABLES:

KEY SKILLS: +

MY **NINJA** BELT:

NINJA SCORE:

NUMERACY

NINJAS

5 MINUTE SKILL CHECK

Use this space for your
KEY SKILLS workings!

